

# ORDINA LE FRAZIONI

calcola i  $\frac{7}{8}$  di 144

calcola gli  $\frac{8}{9}$  di 180

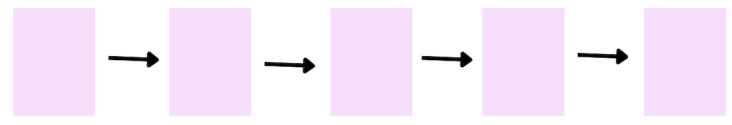
calcola i  $\frac{12}{18}$  di 162

calcola i  $\frac{5}{3}$  di 63

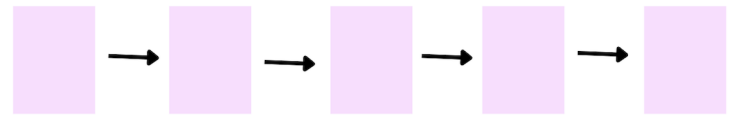
Scrivi le frazioni in ordine decrescente

MULTIPLI  
DI

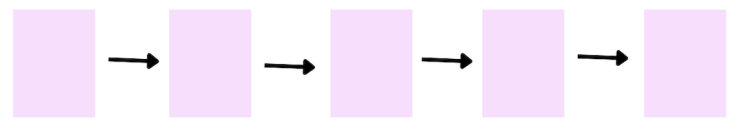
$\frac{2}{5}$     $\frac{1}{5}$     $\frac{4}{5}$     $\frac{3}{5}$



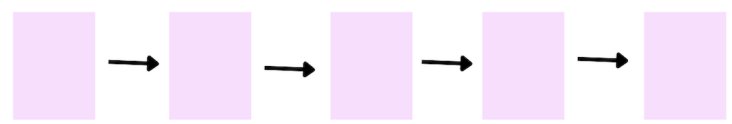
$\frac{6}{8}$     $\frac{4}{8}$     $\frac{7}{8}$     $\frac{1}{8}$



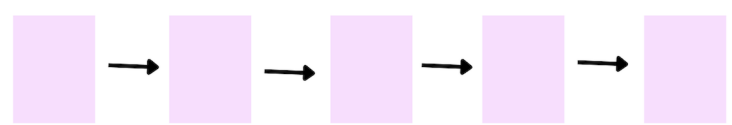
$\frac{4}{6}$     $\frac{1}{6}$     $\frac{2}{6}$     $\frac{5}{6}$



$\frac{5}{9}$     $\frac{3}{9}$     $\frac{7}{9}$     $\frac{8}{9}$



$\frac{3}{10}$     $\frac{5}{10}$     $\frac{8}{10}$     $\frac{1}{10}$

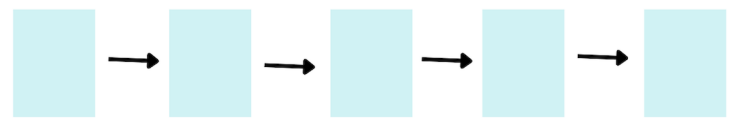


7  
--  
--  
--  
--  
--  
8  
--  
--  
--  
9  
--  
--  
--

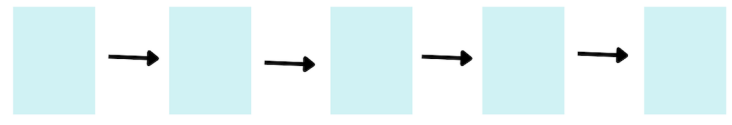
Scrivi le frazioni in ordine crescente

SOTTOMULTIPLI  
DI

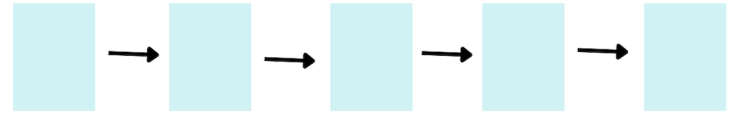
$\frac{1}{8}$     $\frac{1}{5}$     $\frac{1}{4}$     $\frac{1}{6}$



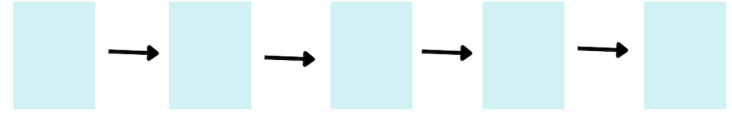
$\frac{1}{5}$     $\frac{1}{2}$     $\frac{1}{3}$     $\frac{1}{4}$



$\frac{1}{7}$     $\frac{1}{3}$     $\frac{1}{5}$     $\frac{1}{6}$



$\frac{1}{6}$     $\frac{1}{2}$     $\frac{1}{4}$     $\frac{1}{5}$



$\frac{1}{8}$     $\frac{1}{5}$     $\frac{1}{10}$     $\frac{1}{2}$



56  
--  
--  
--  
81  
--  
--  
--  
42  
--  
--  
--